

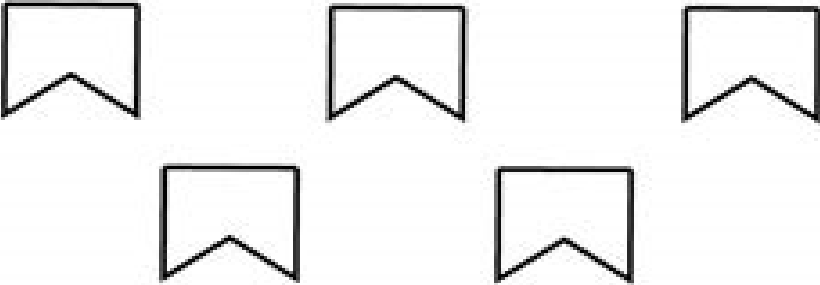
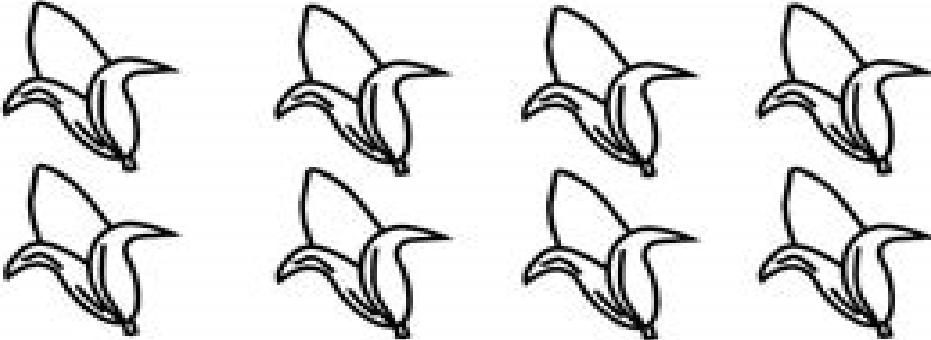


CONTE QUANTOS ELEMENTOS HÁ EM CADA CONJUNTO E PINTE O QUADRADINHO COM O NÚMERO CORRESPONDENTE.

	<table border="1"> <tr> <td data-bbox="1147 374 1303 504">4</td> <td data-bbox="1303 374 1465 504">3</td> </tr> <tr> <td data-bbox="1147 504 1303 633">5</td> <td data-bbox="1303 504 1465 633">7</td> </tr> </table>	4	3	5	7
4	3				
5	7				

	<table border="1"> <tr> <td data-bbox="1147 766 1303 896">7</td> <td data-bbox="1303 766 1465 896">8</td> </tr> <tr> <td data-bbox="1147 896 1303 1025">6</td> <td data-bbox="1303 896 1465 1025">5</td> </tr> </table>	7	8	6	5
7	8				
6	5				

	<table border="1"> <tr> <td data-bbox="1147 1167 1303 1296">8</td> <td data-bbox="1303 1167 1465 1296">5</td> </tr> <tr> <td data-bbox="1147 1296 1303 1426">4</td> <td data-bbox="1303 1296 1465 1426">3</td> </tr> </table>	8	5	4	3
8	5				
4	3				

	<table border="1"> <tr> <td data-bbox="1147 1556 1303 1686">2</td> <td data-bbox="1303 1556 1465 1686">8</td> </tr> <tr> <td data-bbox="1147 1686 1303 1816">7</td> <td data-bbox="1303 1686 1465 1816">9</td> </tr> </table>	2	8	7	9
2	8				
7	9				

NOME: \_\_\_\_\_

DATA: **09/03/2021**

JARDIM II - Prof.<sup>a</sup> \_\_\_\_\_